



FROEBEL'S SCHOOL SYSTEM

FIRST MONTHLY TEST 2015

Class: 5th
Time: 1 Hrs

Paper: Drawing
Total Marks: 50

Student Name _____ Admission No _____

Note:- Attempt all the questions cutting over writing is not allowed on paper.

Q1:- Draw and color Ice-Cream.

10

Q2:- Draw Books and Color it.

10

Q3:- Draw Sun-Flower and Color it.

10

Q4:- Draw a scenery and color it.

20

Wish you best of luck!



FROEBEL'S SCHOOL SYSTEM

FIRST MONTHLY TEST 2015

Class: 4th
Time: 1 Hrs

Paper: G. Science
Total Marks: 50

Student Name _____ Admission No _____

Note:- Attempt all the questions cutting over writing is not allowed on paper.

Q No 1: Choose the correct answers? 05

- 1) The human body is made up of head, Neck, Torso, two arms and _____.
a) Two Eyes b) Two teeth c) Two Legs
- 2) The adult body is made up of 100 trillion cells, 206 bones, _____ muscles.
a) 600 b) 700 c) 900
- 3) Plants have basic need like food, water, space, air and optimal _____ to grow and reproduce.
a) Temperature b) Light c) Oxygen
- 4) Sunlight is the main source of energy for _____.
a) Plants b) Animals c) Birds
- 5) Life is impossible without _____.
a) Water b) Milk c) Chocolate

Q No 2: Marks as True / False? 10

1. Life is impossible without Food. T / F
2. Sunlight is the main source of energy for animals. T / F
3. About 93 percent of your body weight is water. T / F
4. There are 10 types of muscles. T / F
5. About 78 percent of your body is water. T / F

Q No 3: Write the Meanings of the words?

Words	Meanings
Group	

Adult	
Lift	
Bumps	
Stress	

Q No 4: Match the Columns?

10

Column "A"	Column "B"
The average height of an adult Human	Your Body's Every more
The adult body	About 5 to 6 feet tall
Muscles are responsible	Has 206 bones
Our body weight is about	For plants
Sunlight is the main source of energy	70 percent water

Q No 5: Describe Human Body in your own words? Draw diagram of human body?

10

Ans.

Wish You best of Luck



FROEBEL'S SCHOOL SYSTEM

FIRST MONTHLY TEST 2015

Class: Three

Paper: English (Gr)

Time: 01 Hours

Total Marks: 50

Student Name _____ Admission No _____

Note:- Attempt all the questions cutting over writing is not allowed on paper.

Q1:- Write the Possessive cases as Singular and the Plural? 10

1) Lady _____

2) Son _____

3) Teacher _____

4) Girl _____

5) Wife _____

Q2 (a):- Masculine and Feminine? 10

Boy	
Author	
Horse	
Actor	
Brother	
King	
Uncle	
Cook	

Q2 (b): Singular Plural? 10

Bed	
Dog	
Book	
Son	
Fox	
Ball	
Bike	
Star	



FROEBEL'S SCHOOL SYSTEM

FIRST MONTHLY TEST 2015

Class: Four

Paper: English (Gr)

Time: 01 Hour

Total Marks: 50

Student Name _____ Admission No _____

Note:- Attempt all the questions cutting over writing is not allowed on paper.

Q1:- Choose the Countable and Uncountable Noun from these Sentences. 10

- 1) I bought Six Oranges for a glass of fresh orange Juice.
- 2) We like these knives for their sharpness.
- 3) A pen is useless if you don't fill it with ink.
- 4) Four children's were lost in darkness.
- 5) Put some sugar milk and tea leaves to make cup of tea.

Countable	Uncountable

Q2:- Words Synonyms?

10

Words	Synonyms
Avoid	
Hold	
Brilliant	
Harsh	
Agree	



FROEBEL'S SCHOOL SYSTEM

FINAL TERM PAPER 2015

Class: Five

Paper: English (Gr)

Time: 01 Hours

Total Marks: 50

Student Name _____ Admission No _____

Note:- Attempt all the questions cutting over writing is not allowed on paper.

Q1:- Choose the correct answer. 10

1. The Plural of Line is
a). Lines b). Liner c). Linest
2. The Plural of key is
a). Keies b). Keyes c). Keys
3. The Plural of loss is
a). Lost b). Losses c). Lossys
4. The Plural of enemy is
a). enemys b). enemies c). enemeys
5. The Plural of berry is
a). Berries b). Berrys c). berryes

Q2:- Rewrite these sentences from singular to Plural nouns. 10

A baby is playing with the kitten	
A fly sat on the tail of the mouse	
A child took his book and put it on the desk	
There is bridge across the river	
A child is playing with the toy	

Q3: Change the Masculine into Feminine? 5

The twin babies are brothers	
My uncle has two sons	
Grandfather Ali is my Uncle's Father	
A king's son is a prince	
My father has two cars	

Q4: Write the definitions of

5

Noun	
Pronoun	
Adverb	

Q5: Words Opposite?

5

Agree	
Bright	
Danger	
Alive	
Cold	

Q6: Word Synonyms?

5

Bold	
Eager	
Harsh	
Actual	
Award	

Q7: Write an Essay on "My School"?

10

Wish you best of luck!



FROEBEL'S SCHOOL SYSTEM

FIRST MONTHLY TEST 2015

Class: TWO
Time: 01 Hour

Paper: English
Total Marks: 50

Student Name _____ Admission No _____

Note:- Attempt all the questions cutting over writing is not allowed on paper.

Q1:- Fill in the Blanks? (10)

- 1) The village has _____.
- 2) The city is _____.
- 3) The Village has _____.
- 4) People come to _____.
- 5) To make life _____.

Q No 2 (a): Choose the correct Answers? (03)

- 1) The Building is a) Loud b) High c) More
- 2) The road was a) Wide b) busy c) cool
- 3) The river was a) sharp b) wide c) deep

Q No 2 (b): Make Sentences? (02)

Words	Sentences
Monkey	
Deer	

Q2:- Words Meanings?

(10)

Words	Meaning
Tower	
Time	
Tail	
Where	
Snappity	

Q4:- Match the column.

(10)

Column – A	Column – B
Dog	Sing
Cat	Bark
Bird	Moo
Cow	Mew

Q5:- Answer these question.

(10)

Q1. What type of tail does the squirrel has?

Ans. _____

Q2. Where does the squirrel live?

Ans. _____

Q3. Write one big problem in villages?

Ans. _____

Q4. Why do the people come to cities?

Ans. _____

Q5. What do you find in Villages but not in Cities?

Ans. _____

Wish you best of luck!



FROEBEL'S SCHOOL SYSTEM

FIRST MONTHLY TEST 2015

Class: Three
Time: 01 Hours

Paper: Maths
Total Marks: 50

Student Name _____ Admission No _____

Note:- Attempt all the questions cutting over writing is not allowed on paper.

Q1:- Write the following in standard form?

5

4 Thousand, 6 Hundred, 2 Tens, 01 Unit	
9 Thousand, 01 Hundred, 07 Ten, 08 Unit	
4 Thousand, 5 Hundred, 6 Tens, 0 Unit	
3 Thousand, 7 Hundred, 4 Tens, 7 Unit	
9 Thousand, 01 Hundred, 3 Tens, 2 Unit	

Q2:- Write the Numbers in expanding form?

5

8145	
5667	
6432	
1903	
1101	

Q3 (a):- Write in Ascending order?

5

	ASCENDING ORDER
1345 to 1351	
8309 to 8315	
4110 to 4115	
7037 to 7042	
1231 to 1236	

Q No 3 (b): Write in Descending Order?

5

	DESCENDING ORDER
8499 to 8494	
1237 to 1231	
7193 to 7187	
6616 to 6610	
5556 to 5550	

Q No 4: Write the biggest and smallest Numbers?

5

	Biggest	Smallest
6, 1, 7 and 3		
1, 4, 1 and 1		
0, 8, 0 and 3		
1, 4, 6 and 3		
2, 5, 5 and 1		

Q No 5: Skip counting in 100s?

5

300					
765					
4432					
1983					
6241					

Q No 6 (a): Addition?

5

$$\begin{array}{r} \text{a) } 4 \ 0 \ 6 \\ + 3 \ 9 \ 0 \\ \hline \\ \hline \end{array}$$

$$\begin{array}{r} \text{b) } 5 \ 5 \ 4 \\ + 1 \ 7 \ 9 \\ \hline \\ \hline \end{array}$$

$$\begin{array}{r} \text{c) } 4 \ 3 \ 6 \\ + 1 \ 4 \ 2 \\ \hline \\ \hline \end{array}$$

$$\begin{array}{r} \text{d) } 4 \ 2 \ 6 \ 6 \\ + 3 \ 7 \ 0 \ 0 \\ \hline \\ \hline \end{array}$$

$$\begin{array}{r} \text{e) } 3 \ 5 \ 4 \ 9 \ 2 \\ + 3 \ 1 \ 7 \ 2 \ 0 \\ \hline \\ \hline \end{array}$$

Q No 6 (b): Subtraction?

5

a) 8 6 3

- 3 0 2-3 2 17-425 5

b) 3 3 4 7

c) 5 7 3 2

d) 5 1 1 3

- 4 2 55-1 4 08

e) 2 3 0 6

Q No 7: Write Table of 5 and 8?

10

TABLE OF 5	TABLE OF 8

Wish you best of luck!



FROEBEL'S SCHOOL SYSTEM

FIRST MONTHLY TEST 2015

Class: 5th
Time: 01 Hours

Paper: Maths
Total Marks: 50

Student Name _____ Admission No _____

Note:- Attempt all the questions cutting over writing is not allowed on paper.

Q1 (a):- Write the Expanded Form? 5

4,789,564	
3,016,792	
4,466,812	
8,000,000	
9,045,989	

Q1 (b):- Write the Predecessor? 5

89,00,000	
18,20,800	
58,90,000	
10,00,300	
2,890,000	

Q No 2 (a): Addition? 10

a) $1546636 + 3213642$ b) $1156500 + 1117400$

b) $33107140 + 8730242$ d) $56425502 + 78231230$

e) A Library has 45,000 books on mathematics, 4200 books on English and 12340 books on science? How many Total books the Library has?

Ans:

Q No 2 (b): Subtraction?

10

a) 344560 b) 4526272

$- 1256220$ $- 1167234$

c) 96482713 d) 25245536

$- 41123537$ $- 11242746$

e. Ali Bought 28 Playing Cards, out of these 28 he give 20 to his friend. How many are left with Ali?

Ans:

Q No 3: Round off the Answers to the nearest 100 on your papers?

10

a) 545

$+ 441$

b) 399

$+ 425$

c) 049

$+ 521$

$$\begin{array}{r} \text{d) } 5 \ 5 \ 4 \\ + 1 \ 7 \ 9 \\ \hline \\ \hline \end{array}$$

$$\begin{array}{r} \text{e) } 4 \ 3 \ 6 \\ + 1 \ 4 \ 2 \\ \hline \\ \hline \end{array}$$

Q No 4: Multiply the Following?

$$\begin{array}{r} \text{a) } 4 \ 3 \ 4 \\ \times 21 \ 3 \\ \hline \\ \hline \end{array}$$

$$\begin{array}{r} \text{b) } 1 \ 8 \ 7 \\ \times 1 \ 0 \ 0 \\ \hline \\ \hline \end{array}$$

$$\begin{array}{r} \text{c) } 567 \ 8 \\ \times 1 \ 0 \ 0 \\ \hline \\ \hline \end{array}$$

$$\begin{array}{r} \text{d) } 5 \ 6 \ 7 \ 8 \\ \times 5 \ 3 \ 1 \\ \hline \\ \hline \end{array}$$

e. Cost of a computer monitor (LCD) is rupees 19678, what will be the cost for buying 18 such monitors?

Ans:

Wish you best of luck!



FROEBEL'S SCHOOL SYSTEM

FIRST MONTHLY TEST 2015

Class: NURSERY

Time: 01 Hours

Paper: English

Total Marks: 50

Student Name _____ Admission No _____

Note:- Attempt all the questions cutting over writing is not allowed on paper.

Q1:- Join the Dots?

10


Q2:-Encircle the Alphabet "Cc".

10

Aa	Ee	Bb	Dd	Cc
Bb	Dd	Cc	Ee	Aa
Cc	Bb	Aa	Cc	Bb
Dd	Cc	Ee	Aa	Dd
Ee	Aa	Dd	Bb	Ee

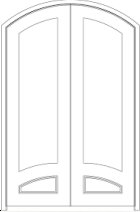



Q No 3: Color the object begin with "Bb"?

10



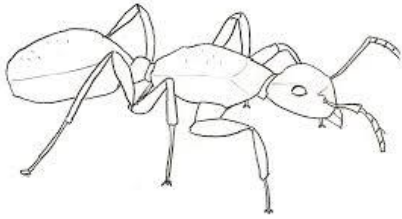


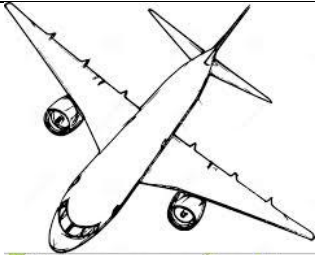
Q No 4: Write "Dd" In lines?

10

Oor		uck	
og		rum	

Q No 5: Encircle the correct option?

10

 Bb Aa Cc Dd	 Aa Bb Cc Dd
 Cc Bb AaEe	 Dd Cc Aa Bb

Wish you best of luck!



FROEBEL'S SCHOOL SYSTEM

FINAL TERM EXAM 2015

Class: NURSERY
Time: 01 Hours

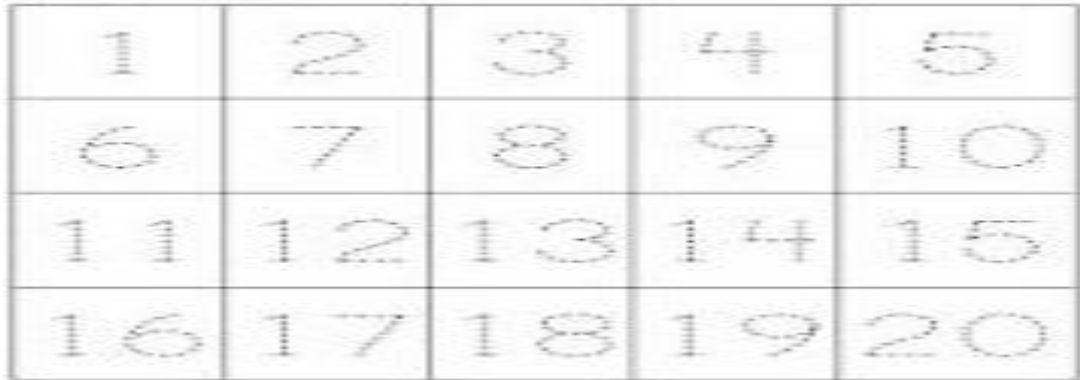
Paper: Maths
Total Marks: 50

Student Name _____ Admission No _____

Note:- Attempt all the questions. cutting over writing is not allowed on paper.



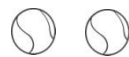






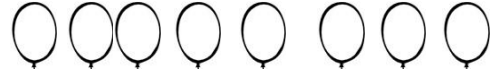
Q1:- Join the Dots?

10



Q2:- Count and match.

10

1. 
2. 
3. 
4. 
5. 
6. 
7. 
8. 
9. 
10. 

Q3:- Encircle the correct option.

10

1. 6

2.  10, 9, 8

3.  2, 1, 4

4.  7, 2, 3

5.  7, 2, 4

Q No 4: What comes After?

10

1	2	
2	3	
3	4	
4	5	
5	6	

Q No 5 (a): Encircle "10"?

5

1	10	7	4	8
9	5	9	10	7
10	8	6	3	8
7	9	3	4	10
6	2	10	5	4

Q No 5 (b): Encircle "4"?

5

1	10	7	4	8
4	5	6	10	7
10	8	4	3	8
7	9	3	10	4
6	4	10	5	10

Wish you best of luck!



FROEBEL'S SCHOOL SYSTEM

FIRST MONTHLY TEST 2015

Class: NURSERY

Time: 01 Hours

Paper: Drawing


Total Marks: 50

Student Name _____ Admission No _____

Note:- Attempt all the questions cutting over writing is not allowed on paper.

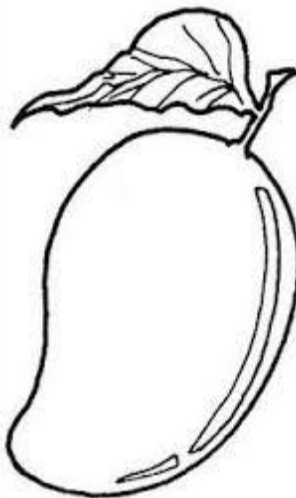
Q1:- Color the tomato.

10



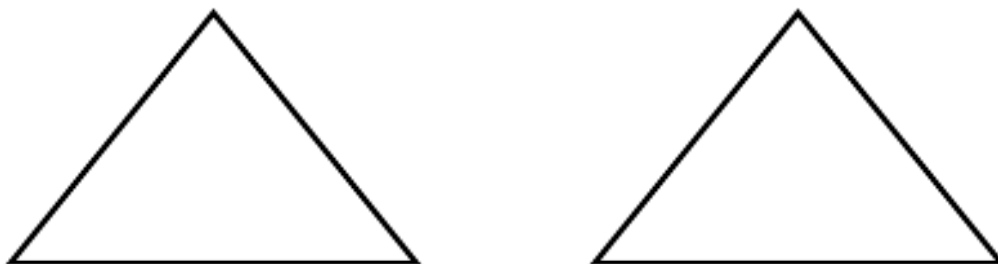
Q2:- Color the Mango.

10




Q3:- Color the Triangle.

10



Q4:- Color the Rectangle.

10



Q5:- Color the Balloons.

10



Wish you best of luck!



FROEBEL'S SCHOOL SYSTEM

FIRST MONTHLY TEST 2015

Class: Two
Time: 01 Hours

Paper: Maths
Total Marks: 50

Student Name _____ Admission No _____

Note:- Attempt all the questions cutting over writing is not allowed on paper.

Q1:- Choose the correct answer Each carry equal marks. 20

1) $4 + 3 + 3 =$

- a). 7 b). 9 c).10 d).None

2) $7 + 8 + 2 =$

- a). 14 b). 16 c).17 d).None

3) $1 + 8 + 7 =$

- a). 16 b). 15 c).14 d) None

4) $\begin{array}{r} 7 \quad 1 \\ + 2 \quad 2 \\ \hline \hline \end{array}$

$\begin{array}{r} \hline \hline \end{array}$

- a). 92 b). 91 c).89 d) None

5) $\begin{array}{r} 4 \quad 6 \\ + 1 \quad 8 \\ \hline \hline \end{array}$

$\begin{array}{r} \hline \hline \end{array}$

- a). 64 b). 63 c).69 d) None

6) $7 - 4 =$

- a). 3 b). 4 c).2 d) None

7) $5 - 4$

- a). 5 b). 4 c).0 d) None

8) $4 - 4$

- a). 4 b). 8 c).2 d) None

$$9) \quad \begin{array}{r} 3 \quad 9 \\ - 3 \quad 6 \\ \hline \hline \end{array}$$

$$- 3 \quad 6$$

- a). 9 b). 3 c).5 d) None

$$10) \quad \begin{array}{r} 6 \quad 2 \\ - 5 \quad 9 \\ \hline \hline \end{array}$$

$$- 5 \quad 9$$

- a). 4 b). 6 c).15 d) None

Q No 2: Hundred Tens & units?

10

971	
186	
Four Hundred and sixty Three	
563	
Four Hundred and Fifty	

Q No 3: What Comes After Before and Between?

10

236		After	
121		After	
677		Before	
634			Between
779		781	Between

Q No 4: Even and Odd Numbers?

10

Even Number Pattern

40	42				
12		15	16		
60			66		70

ODD Numbers Pattern

43			49		
103			109		

Wish you best of luck!



FROEBEL'S SCHOOL SYSTEM

FIRST MONTHLY TEST 2015

Class: Four
Time: 01 Hours

Paper: Maths
Total Marks: 50

Student Name _____ Admission No _____

Note:- Attempt all the questions cutting over writing is not allowed on paper.

Q No 1 (a):- Write the following in Standard form? 5

62 Thousand 6 Hundred 4 Tens 0 Units	
70 Thousand 5 Hundred 7 Tens 8 Units	
53 Thousand 4 Hundred 6 Tens 2 Units	
35 Thousand 7 Hundred 4 Tens 0 Units	
34 Thousand 6 Hundred 5 Tens 5 Units	

Q No 1 (b): Write in Units, Tens, Hundred, Thousand, Ten Thousand, Lac and Ten Lac? 5

9633276	
4771254	
659001	
90510	
34127	

Q No 2 (a): Write in Expanded form? 5

2892083	
4326760	
5345577	
134756	
446612	

Q No 2 (b): Write these numbers in Roman Numerals? 5

30	
21	
63	
18	
55	

Q No 3 (a): Addition? 10

a)
$$\begin{array}{r} 4 \ 6 \ 4 \ 2 \ 6 \ 6 \\ + 2 \ 7 \ 3 \ 700 + 1 \ 3 \ 8417 \end{array}$$

$$\begin{array}{r}
 \text{c) } 54 \quad 502 \quad \text{d) } 5 \quad 5 \quad 3 \quad 4 \quad 0 \quad \text{e) } \quad 6 \quad 0 \quad 0 \quad 1 \quad 2 \\
 + 1 \quad 3 \quad 2 \quad 30 \quad 2 \quad 14 \quad 50 \quad \quad \quad \quad \quad 5 \quad 118 \\
 \hline
 \hline
 \end{array}$$

Q No 3 (b): Subtraction?

10

$$\begin{array}{r}
 \text{a) } \quad 6 \quad 2 \quad 4 \quad 4 \quad 3 \quad \quad \text{b) } \quad 4 \quad 5 \quad 5 \quad 1 \quad 1 \quad 3 \\
 - \quad 2 \quad 1 \quad 21 - 2 \quad 4 \quad 4255 \\
 \hline
 \hline
 \end{array}$$

$$\begin{array}{r}
 \text{c) } 22 \quad 154 \quad \quad \text{d) } \quad 4 \quad 5 \quad 6 \quad 7 \quad 800 \\
 - 1 \quad 39 \quad 36 - 23 \quad 74800 \\
 \hline
 \hline
 \end{array}$$

$$\begin{array}{r}
 \text{e) } \quad 8 \quad 7 \quad 3 \quad 4 \quad 6 \quad 11 \\
 - 3 \quad 4 \quad 72310 \\
 \hline
 \hline
 \end{array}$$

Q No 4: Multiplication?

10

$$\begin{array}{r}
 \text{a) } \quad 2 \quad 7 \quad 9 \quad \quad \quad \text{b) } \quad 4 \quad 2 \quad 4 \quad \quad \quad \text{c) } \quad 5 \quad 7 \quad 3 \\
 \times \quad 2 \quad 1 \quad \quad \quad \quad \quad \times \quad 1 \quad 8 \quad \quad \quad \quad \times \quad 2 \quad 2 \quad 4 \\
 \hline
 \hline
 \end{array}$$

d) $26 \times 10 =$ _____ e) $70 \times 40 =$ _____

Wish you best of luck!



FROEBEL'S SCHOOL SYSTEM

FINAL TERM EXAM 2015

Class: Prep
Time: 01 Hours

Paper: Maths
Total Marks: 50

Student Name _____ Admission No _____

Note:-Attempt all questions cutting and over writing is not allowed.

Q No 1 (a):- Write counting 1 to 20. 10

Q No 1 (b): Write 1 to 5 in words? 10

--	--	--	--	--

Q2:- What comes between. 10


3 _____ 5
6 _____ 8
8 _____ 10
11 _____ 13
14 _____ 16

Q3:- What comes after. 10

3 , 4 _____
6 , 7 _____
9 , 10 _____
12 , 13 _____
15 , 16 _____

Q9:- Color the shapes?

10



Wish you best of luck!



FROEBEL'S SCHOOL SYSTEM

FIRST MONTHLY TEST 2015

Class: Prep
Time: 01 Hour

Paper: Drawing
Total Marks: 50


Student Name _____ Admission No _____

Note:- Attempt all questions cutting and over writing is not allowed.

Q1:- Draw a Circle. 10

Q2:- Draw a Square. 10

Q3:- Color the Apple? 10



Q4:- Color the Mango?

10



[©Kidsfront.com](http://Kidsfront.com)

Q5:- Color the Ball?

10



Wish you best of luck!



FROEBEL'S SCHOOL SYSTEM

FIRST MONTHLY TEST 2015

Class: Prep
Time: 01 Hours

Paper: English
Total Marks: 50

Student Name _____ Admission No _____

Note:- Attempt all question cutting and over writing is not allowed.











Q1:- Write "Aa" to Zz? 10





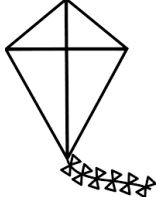
Q2:- Match the column. 10

Column – A	Column – B
A	D
B	C
C	B
D	A
E	I
F	J
G	H
H	G
I	F
J	E

Q No 3: Fill in the Blanks? 10

- 1) Color of Apple is
a) Red b) Green c) Yellow
- 2) Color of Banana is
a) Yellow b) Red c) Green
- 3) Color of Tree is
a) Green b) Black c) Yellow
- 4) Taste of Mango is
a) Sweet b) Sour c) Both
- 5) Taste of Grapes is
a) Sour b) Sweet c) Both

Column "A"	Column "B"
Ball	
Apple	
Butterfly	
Cap	
Star	
Grapes	
Fish	
Egg	
Bat	
Eye	

 Ee, Ff, Gg	 Ee, Ff, Hh	 Gg, Hh, li
 Hh, Ff, Gg	 Kk, Ll, Mm	

Wish you best of luck!



FROEBEL'S SCHOOL SYSTEM

FIRST MONTHLY TEST 2015

Class: Prep
Time: 01 Hours

Paper: G. Science
Total Marks: 500

Student Name _____ Admission No _____

Note:- Attempt all questions cutting and over writing not allowed.

Q1:- Fill in the blanks. Choose the correct option. 10

- 1) _____ is living thing.
a). Love b). Cow c).Bat
- 2) _____ is non living thing.
a). Cat b) Fan c).Cow
- 3) _____ is Living Thing.
a). Elephant b).Ball c). Pen
- 4) _____ is Non Living Thing.
a). Cup b). Cat c).Cow
- 5) _____ is Living Thing.
a). Tree b).Pen c).Ball

Q2:- Tick and cross. 10






6. Plants are good for us. ()
7. Trees make us sick. ()
8. Plants are our friend. ()
9. Dog is Living Thing. ()
10. Bag is non Living Thing. ()

Q3:- Match the column. 10

Column "A"	Column "B"
Cow	Bag
Bag	Cow
Cat	Ball
Ball	Hen
Hen	Cat

Q4:- Encircle the correct answer?

10

 <p>Tt, Ff, Oo</p>	 <p>Bb, Ff, Oo</p>
 <p>Tt, Ff, li</p>	 <p>Cc, Ff, Tt</p>
 <p>Tt, Ff, Oo</p>	

Q7:- Answer the Following Questions?

10

1:- What Provides us Energy?

Ans. _____

2:- What Need to Grow?

Ans. _____

3:- Tree is a Living Thing or Not?

Ans. _____

4:- Book is Non Living Thing or Not?

Ans. _____

Wish you best of luck!



FROEBEL'S SCHOOL SYSTEM

FIRST MONTHLY TEST 2015

Class: Prep
Time: 01 Hours

Paper: Social Study
Total Marks: 50

Student Name _____ Admission No _____

Note:- Attempt all question cutting and over writing is not allowed.

Q1:- Choose the correct answer.


10

- 1) My School is _____.
a). Big b).Small c).None of them
- 2) My School is _____.
a). Dirty b).Clean c).None of them
- 3) My School is
a). Beautiful b). Ugly c).None of them
- 4) I love my _____.
a). School b).Street c).Book
- 5) We _____ in break time.
a). Sleep b). Study c).Take Lunch

Q2:- Color the Picture?

10





Q No 4 (a) : What is Your name?





















5

Ans:

Q No 4 (b): What is Your School Name?

5

Ans:

Column "A"	Column "B"
	
	
	
	
	
	
	
	
	
	

Wish you best of luck!



FROEBEL'S SCHOOL SYSTEM

FIRST MONTHLY TEST 2015

Class: Prep
Time: 01 Hours











Paper: WAM
Total Marks: 40

Student Name _____ Admission No _____

Note:- Attempt all questions







Q No 1:- Match the picture with their picture.

10


Q No 2: Match picture with their name?

10

Eyes	
Lips	
Nose	
Teeth	
Ear	
Tongue	


Q No 3: Color the Girl Dress?

10



Q No 4: Color the Boy Dress?

10



Note:-10 Marks are for G. Knowledge Oral.

Wish you best of luck!



FROEBEL'S SCHOOL SYSTEM

FIRST MONTHLY TEST 2015

Class: ONE
Time: 01 Hours

Paper: Social Study
Total Marks: 50

Student Name _____ Admission No _____

Note:- Attempt all the questions cutting over writing is not allowed on paper.

Q1:- Choose the correct answers. 10

1. I am a _____.
a). Girl b). Boy c). Both A & B
2. I have _____ brothers and sisters.
a). 1 b). 2 c).3 d) 4 e) 5 f) 6 g) 7 h) 8 i) 9
3. I am _____ Years Old.
a). 4 b). 5 c).6d) 7e) 8f) 9g) 10 h) 11 i) 12
4. I study in
a). City School b). Froebel's School System c).Froebels Education
5. I live in
a). Islamabad b). Lahore c).Peshawar

Q2:- Draw and Color one room of your Home? 10

Q3:- Match the columns.

10

Column – A

Column – B

I live in a

Parents

I Live with my

House

I love my

Home

I keep it

Clean

We are happy in

Our Home

Q4:- Recognize these places of a home?

10



Q1. How many rooms are there in your home?

Ans. _____

Q2. Which place in home is used for cooking food?

Ans. _____

Q3. Is your home made of straw, Mud, wood or bricks?

Ans. _____

Q4. What do you do in living room?

Ans. _____

Q5. What is your name?

Ans. _____

Wish you best of luck.....



FROEBEL'S SCHOOL SYSTEM

FIRST MONTHLY TEST 2015

Class: ONE
Time: 01 Hours

Paper: G. Science
Total Marks: 50

Student Name _____ Admission No _____

Note:- Attempt all the questions cutting over writing is not allowed on paper.

Q1:- Choose the correct answers. 10

- Living things can _____.
a). Move b). Not Move c). None of these
- Living Things can _____ and develop.
a). Grow b). Not Grow c). Fly
- Non Living Things can _____ and drink water.
a). Not Eat b). Eat c). Run
- Non Living Things can _____ through air.
a). Not Breathe b). Breathe c). Taste
- Non Living Things __ Reproduce.
a). can b). cannot c). Could

Q2:- Mark as (T) for True and (F) for False. 10

- Living Things can Move. T / F
- Living Things can eat and drink. T / F
- Living Things can't grow and reproduce. T / F
- Non Living Things do not Reproduce. T / F
- Some living things like Fish get their oxygen from Air. T / F

Q3:- Question / Answer. Each carry two marks. 10

1. Can Living Things Move?

Ans. _____

2. Can Non Living Things Move?

Ans. _____

3. Can Non Living Things grow and develop?

Ans. _____

4. Can Non Living Things breathe through air?





Ans. _____


5. Can Living Things eat and drink?

Ans. _____

Q No 4: Sort the pictures in Living and Non Living Things?






10



Q No 5: Put a Tick Sign in Boxes and describe each thing?

10

Picture	Move	Eat and Drink	Reproduce	Breathe	Grow and Develop	Result Living or Non Living Thing
						
						
						
						
						

Wish you best of luck!



FROEBEL'S SCHOOL SYSTEM

FIRST MONTHLY TEST 2015

Class: ONE
Time: 01 Hours

Paper: English
Total Marks: 50

Student Name _____ Admission No _____

Note:- Attempt all the questions cutting over writing is not allowed on paper.

Q No 1:- Choose the correct answers. 10

1. Sarim puts his books on the _____.
a).Clock b). Table c). Head
2. There is a _____ to sit in.
a). Desk b). Chair c). Books
3. The _____ Shows time.
a). Clock b). Cupboard c).Window
4. The _____ lets fresh air to come in.
a). Clock b). CupBoard c).Window
5. Sarim keeps his clothes in the _____.
a).Desk b). Chair c). CupBoard

Q No 2:- Mark as (T) for True and (F) for False. 10

1. Sarim is a student of Prep Class. T / F
2. He gets up at 7 O Clock. T / F
3. Sarim learns good manners at school. T / F
4. Sarim Watches Television in the Evening. T / F
5. He does Not play with his Friends. T / F

Q No 3:- Words / Meanings. 10

Words	Meanings
Bath	_____
BreakFast	_____
Night	_____

Morning _____

Busy _____

Q No 4:- Write missing letters in Each Line?


A _____ c _____ f _____ g _____ h l

_____ k _____ m n _____ p q _____ s _____

U _____ w x _____ z

Q No 5: Write the name of these things?

10











Wish you best of luck!



FROEBEL'S SCHOOL SYSTEM

FIRST MONTHLY TEST 2015


Class: ONE
Time: 01 Hours

Paper: Drawing
Total Marks: 50


Student Name _____ Admission No _____

Note:- Attempt all the questions

Q1:- See the Picture and Draw that picture and color it? 10



Q2:- See the Picture and Draw that picture and color it? 10




Q3:- See the Picture and Draw that picture and color it? 10




Q4:- See the Picture and Draw that picture and color it?

10



Q5:- See the Picture and Draw that picture and color it?

10



Wish you best of luck!



FROEBEL'S SCHOOL SYSTEM

FIRST MONTHLY TEST 2015








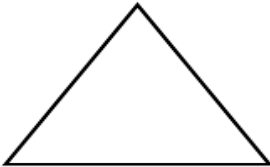


Class: ONE
Time: 01 Hours

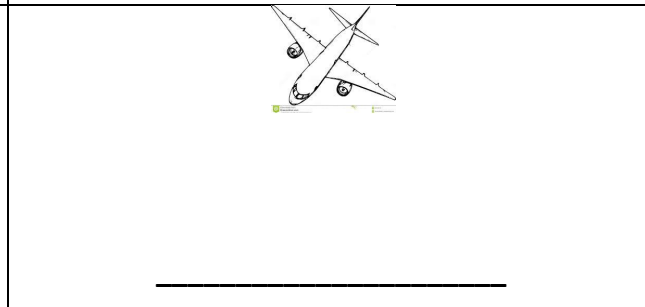
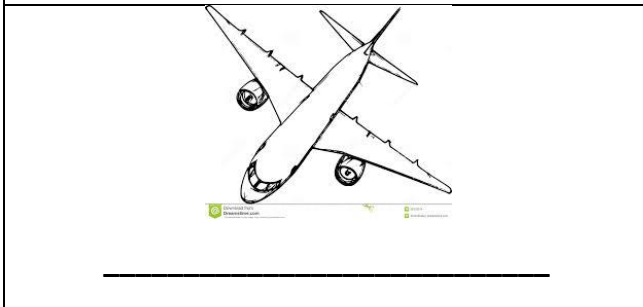




Paper: Maths
Total Marks: 50

Student Name _____ Admission No _____

Note:- Attempt all the questions cutting over writing is not allowed on paper.

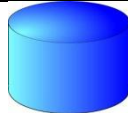

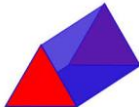

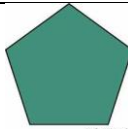
Q1:- Identify Thick and Thin?

 _____	 _____
 _____	 _____
 _____	 _____
 _____	 _____
 _____	 _____





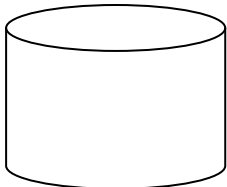
Q3:- Match the columns.

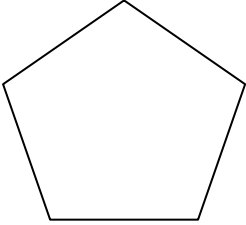
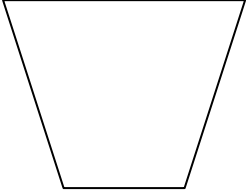
10

Pentagon	
Cone	
Cylinder	
Cube	
Prism	

Q No 4: Count the corners, Faces edges on each shape. Name the 3d shapes?

10

	Faces: _____ Edges: _____ Corners: _____ Name of 3d shape: _____
	Faces: _____ Edges: _____ Corners: _____ Name of 3d shape: _____
	Faces: _____ Edges: _____ Corners: _____ Name of 3d shape: _____

	<p>Faces: _____</p> <p>Edges: _____</p> <p>Corners: _____</p> <p>Name of 3d shape: _____</p>
	<p>Faces: _____</p> <p>Edges: _____</p> <p>Corners: _____</p> <p>Name of 3d shape: _____</p>

Q No 5: Write Table of 3?

TABLE OF 3

Wish you best of luck....



FROEBEL'S SCHOOL SYSTEM

FIRST MONTHLY TEST 2015

Class: Nursery
Time: 01 Hours











Paper: WAM
Total Marks: 40

Student Name _____ Admission No _____

Note:- 10 Marks are for General Knowledge oral







Q No 1:- Match the picture with their picture.

10

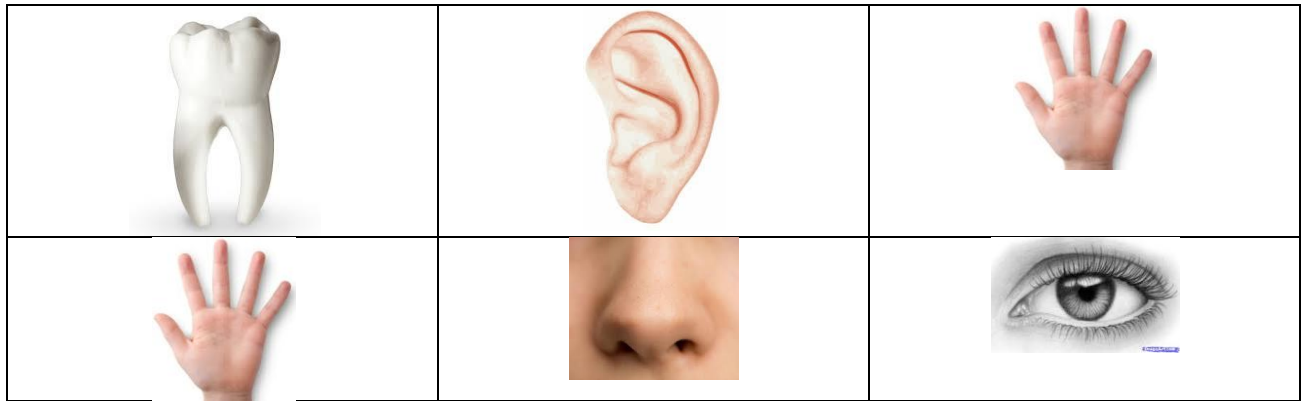
Q No 2: Match picture with their name?

10

Eyes	
Lips	
Nose	
Teeth	
Ear	
Tongue	

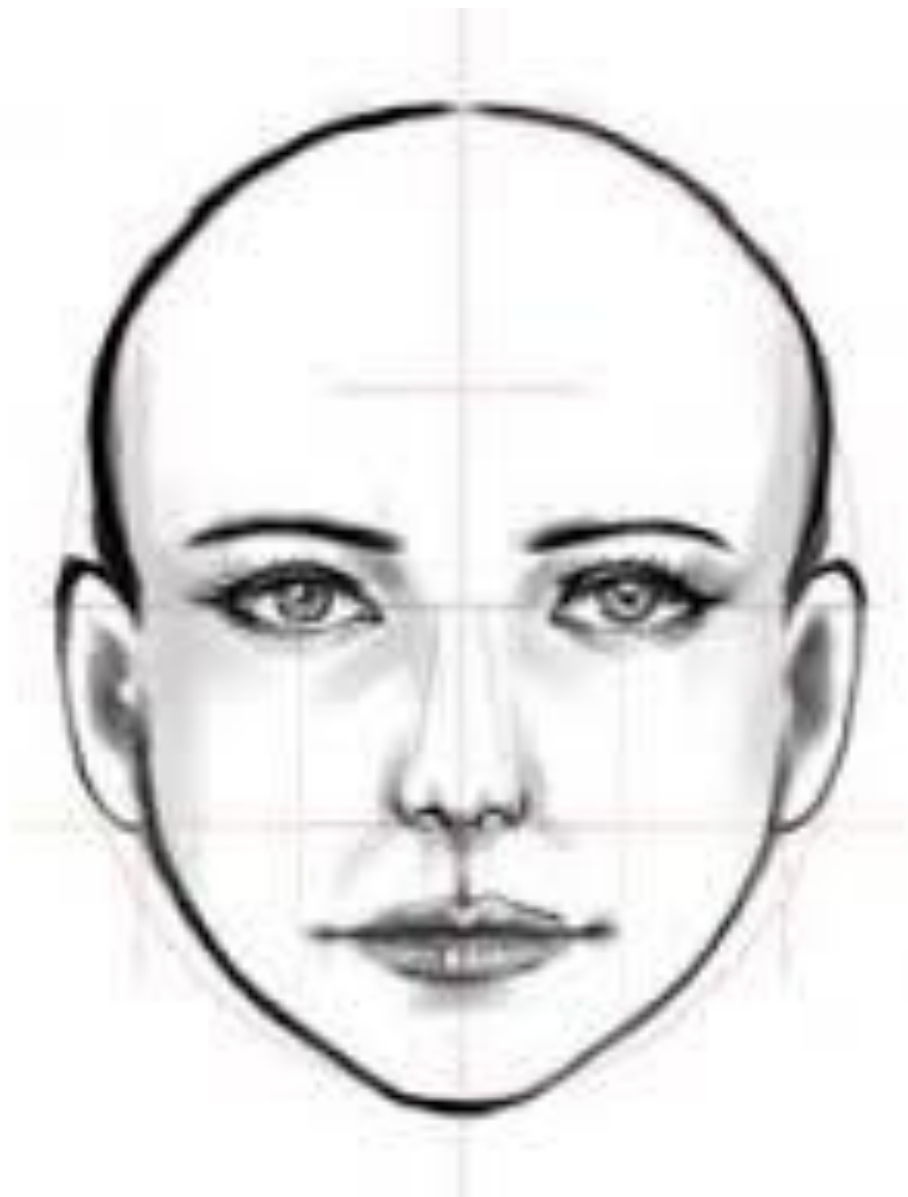
Q No 3: Encircle the Hand?

10



Q No 4: Color the Face?

10



NOTE: 10 Marks are for General Knowledge Oral

Wish you Best of Luck



FROEBEL'S SCHOOL SYSTEM

FINAL TERM EXAM 2015

Class: SIX
Time: 01 Hours

Paper: Maths
Total Marks: 50

Student Name _____ Admission No _____

Note:- Attempt all questions cutting over writing is not allowed.

Q No 1: TRUE FALSE? 5

- 1) $4 \in \{ : \text{ is an even number} \}$ T / F
- 2) $S \in \{ : \text{ is a vowel} \}$ T / F
- 3) If $a \in A \& A \in B$, then $a \in B$ T / F
- 4) If $Q = A'$, then $A = U$ T / F
- 5) $5 \in \{ 1, 3, 5, 7 \}$ T / F

Q No 2: Pick up the odd elements in each set and state reason? 5

{Kashif, Adnan, Sarim, Adeel, Sana}	
{Lion, Leopard, Ostrich, Zebra}	
{Pakistan, Poland, Bangladesh, Portugal}	
Tea is very popular drink	

Q No 3: Write down the elements of the sets? 5

{Name of Calendar year months}	
Multiples of 7 less than 49	
Baluchistan, Sindh, KPK, Punjab	
{Colors of Rainbow}	
{Names of all compulsory Prayers}	

Q No 4: If $U = \{1, 2, 3, 4, \dots, 20\}$, $A = \{\text{Multiples of 2}\}$, $B = \{\text{Multiples of 4}\}$. 5

List the elements A' , B'

Q No 5: Draw and label Venn's diagrams. Identify in each case (A, B) 5

$A = \{X, y, z, m, n\}$, $B = \{\text{Consonants in the word Money}\}$

$A = \{a, b, c, d, e, f\}$, $B = \{b, c, o, p, q\}$

Q no 6: Find the Union and intersection of each sets below. Find

10

$U = \{1, 2, 3, 4, 5, \dots, 12\}$

$A = \{1, 2, 3, 5, 7, \dots, 11\}$

$B = \{1, 3, 5, 7, 9, 11\}$

Q No 7: If $A = \{a, b, c\}$, Find $P(A)$ and A

5

If $A = \{1, 2, 3, 4, 5, 6, 7\}$ $B = \{3, 5, 7\}$

Find $A \cup B$ & $A \cap B$

Q No 8: If $U = \{1, 2, 3, 4, 5\}$, $A = \{1, 2, 4\}$, $B = \{1, 4, 5\}$

10

List the element

Wish you best of luck!



FROEBEL'S SCHOOL SYSTEM

FIRST MONTHLY TEST 2015

Class: Six
Time: 01 Hours

Paper: G. Science
Total Marks: 50

Student Name _____ Admission No _____

Note:- Attempt all question.

Q1:- Choose the Correct Answers? 10

- 1) There are cells that are organisms themselves, such as _____ and bacteria cells.
a) Amoeba b) Virus c) Skin
- 2) One major difference in cells occurs between _____ and animals cells.
a) Plants b) CytoPlasm c) Nucleus
- 3) Plant cells make their own food in a process called _____.
a) Photosynthesis b) Chlorophyll c) DNA
- 4) Plant cells are like animal cells but they have a cell wall and _____.
a) Chlorophyll b) Photosynthesis c) Chloroplast
- 5) Animals cells are _____ so they can't support as much as weight.
a) Spherical b) Round c) Square

Q2: Mark as TRUE / FALSE? 10

- 1) The cell is one of the most basic unit of mass. T / F
- 2) The cell is the smallest unit of life in our bodies. T / F
- 3) There are millions of different type of cells, T / F
- 4) Animal Cells are the cells found in Animals. T / F
- 5) The Nucleus also contain the DNA which is like a green print. T / F

Q3: Write the Meaning of the following words? 10

Words	Meaning
Cell	
Organism	
Remove	
Store	
Veins	



FROEBEL'S SCHOOL SYSTEM

FIRST MONTHLY TEST 2015

Class: Four
Time: 01 Hour

Paper: Social Study
Total Marks: 50

Student Name _____ Admission No _____

Note:- Attempt all questions cutting over writing is not allowed on paper.

Q1:- Choose the correct option. 10

- 1) There is no GOD but
a). Allah b). Muhammad c).Nooh
- 2) Hajj is performed in the month of
a). Zil Hajj b). Ramzan c).Shaban
- 3) _____ was the king Abyssinia.
a). Negus b). Egypt c).Abyssinia
- 4) The first person who accepted Islam was
a). Ayesha (R.A) b). Khadija (R.A) c).Shaib (R.A)
- 5) Zakat is an obligation to only _____ Muslims.
a). Wealthy b). Poor c).Needy

Q2:- Mark true or false. 10

1. Zakat is given to the Poor.. (T / F)
2. Muslim pay 2% of their Wealth as Zakat. (T / F)
3. Hira was a cave outside Makkah. (T / F)
4. Najashiill treated the Muslims. (T / F)
5. Muslims gather in Makkah for Hajj. (T / F)

Q3:- Match the column. 10

Column "A"	Column "B"

Q4:- Write the meanings of words.

10

Words	Meanings

Q5:- Attempt any two question.

10

Q1. What are the five pillars of Islam?

Ans.

Q2. What does shadah means?

Ans.

Q3. What happened with Taif?

Ans.


Q4. What is mean by the Year of Sorrow?

Ans.

Q5. What is mean by Saum?

Ans.

Wish you best of luck.....



FROEBEL'S SCHOOL SYSTEM

FIRST MONTHLY TEST 2015

Class: Three
Time: 01 Hours

Paper: Social Study
Total Marks: 50

Student Name _____ Admission No _____

Note:- Attempt all questions cutting over writing is not allowed on paper.

Q1:- Choose the best answer. 10

1. _____ was the first prophet of Allah.
a). Ibrahim b). Nooh c).Adam
2. Nooh preached for _____ Years.
a). 700 b). 800 c).900
3. When the boat was completed the _____ started.
a). Rain b). Snowfall c).Flood
4. All human beings are _____ of Adam.
a). Son b). Children's c).Daughter
5. Father of Ibrahim was a _____
a). Farmer b). King c). Caliph

Q2:- Mark as True or False. 10

1. Father of Ibrahim was Farmer (True / False)
2. Allah was present when there was nothing. (True / False)
3. All Human beings are childrens of Adam. (True / False)
4. No one outside the Boat survived. (True / False)
5. Ibrahim Married Aasia. (True / False)

Q3:- Words / Meanings. 10

Words	Meanings
Nothing	
Universe	
Angles	
Death	
Idols	

Q4:- Match the columns.

10

Column – A

Column – B

Allah

Nine Hundred Years

Adam

on Boat

Nooh Preached

Babylon

Birds & Animals

First Human

Namrood

Created Universe

Q5:- Answer these questions.

10

Q1. Who created this Universe?

Ans: _____

Q2. Who was Adam?

Ans: _____

Q3. Why did Nooh made a boat?

Ans: _____

Q4. Why did Allah sent Nooh?

Ans: _____

Q5: Who built the Holy Kaaba?

Ans: _____

Wish you best of luck.....



FROEBEL'S SCHOOL SYSTEM

FIRST MONTHLY TEST 2015

Class: 5th
Time: 01 Hours

Paper: Social Study
Total Marks: 50

Student Name _____ Admission No _____

Note:- Attempt all questions cutting over writing is not allowed on paper.

Q1:- Choose the correct option. 10

- The Equator is _____ degree Latitude.
a). 0 b). 45 c).90
- The climate is rich for the _____.
a). Industry b). Agriculture c).Mining
- People use road map to _____.
a). Modify b). Climate c).Plan Trip
- The person who make a Map is a). Map Makerb). Map Constructor c). Mapper
- _____ is not suitable for agriculture.
a). Potwar Plateau b). Salt Range c).Thal

Q2:- Mark True or False. 10

- River Indus is largest River of our Country. (T / F)
- The Average height of the salt range is about 2000 Feet. (T / F)
- Political Map do not shows Physical Features. (T / F)
- The Equator is 0 degree latitude. (T / F)
- The prime meridian is found in Greenwich USA. (T / F)

Q3:- Match the column. 10

Column – A

Column – B

Rod Map

About Weather

Prayers

Some Highway

Physical Map

Capital

Islamabad

Five

Climate Map

About Area

Q4:- Write meanings of these words.

10

Words	Meanings	Words	Meanings
Several	_____	Map Maker	_____
Map	_____	National	_____
Area	_____		

Q6:- Attempt any two questions.

10

Q1. Name the main lines of Latitudes and Longitudes?

Ans. _____

Q2. What are different type of Maps?

Ans. _____

Wish you best of luck.....



FROEBEL'S SCHOOL SYSTEM

FIRST MONTHLY TEST 2015

Class: Two
Time: 01 Hours

Paper: Social Study
Total Marks: 50

Student Name _____ Admission No _____

Note:- Attempt all questions cutting over writing is not allowed on paper.

Q1:- Choose the best answer. 10

- Followers of Islam are called
a). Hindu b). Muslims c). Christians
- The prophet (SAW) never told a
a). Truth b). Lie c). Bad
- _____ is the holy book of Islam.
a). Zabur b). Injil c). Quran
- The Quran is the word of
a). Allah b). Jibrail c). Prophet
- There are _____ paras in Quran.
a). 33 b). 30 c). 29

Q2:- Mark as True or False. 10

- Quran is the word of Allah T / F
- Prophet (SAW) always help poor. T / F
- Quran is the code of life. T / F
- Chapter of Quran is called as Para. T / F
- All books sent by Allah is unchanged. T / F

Q3:- Words / Meanings. 10

Words	Meanings
Prophet	_____
Born	_____
Noble	_____
Life	_____

Change _____

Q4:- Match the column. 10

Column – A

Column – B

- | | | |
|-----|----------------------|----------------|
| 1). | Prophet (Saw) Father | Abu Talib |
| 2). | Prophet (SAW) Uncle | Dauod (A.S) |
| 3). | Quran | Abdullah |
| 4). | Zabur | Muhammad (SAW) |
| 5). | Injil | ISA (A.S) |

Q5:- Answer these question. 10

Q1. When and Where was Prophet (SAW) Born?

Ans:- _____

Q2. Who was Abu Talib?

Ans:- _____

Q3. What is mean by Sadiq and Amin?

Ans:- _____

Q4. Who is Jibrail?

Ans: _____

Q5: What is a Hafiz?

Ans: _____



FROEBEL'S SCHOOL SYSTEM

FIRST MONTHLY TEST 2015

Class: SIX
Time: 01 Hours

Paper: Social Study
Total Marks: 50

Student Name _____ Admission No _____

Note:- Attempt all questions cutting over writing is not allowed on paper.

Q1:- Choose the best answer. 10

- 1) Saudia Arabia is the _____ country of Arabian Peninsula.
a). Smallest b). Largest c). Both
- 2) Indonesia is most fertile land on the island of
a). Punjab b). Indus c). Java
- 3) Most of the earth is always covered with ice is called
a). Thunder b). Heat c). Hot
- 4) Estimate of the total number of Muslim range from _____ to 1.8 million.
a). 0.7 b). 0.7 c). 0.6
- 5) Sheep Raring is the _____ occupation of people of Baluchistan.
a). Major b). Minor c). Both

Q2:- Mark as True or False. 10

- 1) About 33% of all people on earth follow Islam. T / F
- 2) River Indus is largest river of Pakistan. T / F
- 3) Indonesia is the most Fertile land on the Island Java. T / F
- 4) The climate of Indonesia is Hot, Wet and Humid. T / F
- 5) The temperature and rain is very high in Tropical Zone. T / F

Q3:- Words / Meanings. 10

Words	Meanings
World	_____
Growing	_____
Religion	_____
Mostly	_____

Nation _____

Q4:- Match the column.

10

Column – A

Column – B

- | | | |
|-----|---------------|----------------------|
| 1). | Islam | 97% |
| 2). | Shahdah | 2,150,000 Kilometers |
| 3). | Indonesia | Islam |
| 4). | Saudia Arabia | Tropical |
| 5). | Pakistan | Second Large |

Q5:- Answer these question.

10

Q1. Differentiate between Climate and Weather?

Ans:-

Q2. Describe the Physical Features of Indonesia?



FROEBEL'S SCHOOL SYSTEM

FIRST MONTHLY TEST 2015

Class: 5th
Time: 01 Hours

Paper: G. Science
Total Marks: 50

Student Name _____ Admission No _____

Note:- Attempt all questions cutting over writing is not allowed on paper.

Q1:- Choose the correct option. 10

- 1) Classification makes the study of such a wide variety of _____ easy.
a). Organism b). Animals c). Birds
- 2) Classification serves as the base for the development of _____
a). Biogeography b). Agriculture c). Public Health
- 3) Vertebrates are those animals that have a _____ or a spinal cord.
a). Backbone b). Feather c). Stomach
- 4) _____ can live in the air, on land and in fresh or salt water environments.
a). Organisms b). Micro Organisms c). Animals
- 5) 98 out of _____ type of animals in the world today are invertebrates.
a). 100 b). 1000 c). 10

Q2:- Tick True or False. 10

1. A class is defined as a collection of similar entities. T / F
2. Phylum Arthropod is the highest group or phylum. T / F
3. The leaves of dicots are often long and narrow. T / F
4. Most Mammals use their wings to fly. T / F
5. Arthropods have an open circulatory system. T / F

Q3:- Match the column. 10

Column – A

Vertebrates
Invertebrates
Mammals
Reptiles
Amphibians

Column – B

Have moist skin that does not have any hair or feather
Animals such as snakes, lizards and turtles
Have a backbone or spinal cord
Do not have a backbone and spinal cord
Humans, dogs, elephants, rabbits are example of

Q4:- Write the meanings of these words.

10

Words	Meanings
Organisms	
Mammals	
Reptiles	
Harmful	
Survive	

Q5:- Attempt the Following Questions?

10

a) Define Classification? Write in details.

(4)

Ans: _____

b) Write on Birds?

(2)

Ans: _____

c) Write on Amphibians?

(2)

Ans:

d) Write on Fish?

(2)

Ans:

Wish you best of luck.....



FROEBEL'S SCHOOL SYSTEM

FIRST MONTHLY TEST 2015

Class: 5th
Time: 01 Hours

Paper: English
Total Marks: 50

Student Name _____ Admission No _____

Note:- Attempt all questions cutting over writing is not allowed on paper.

Q No 1:- Choose the correct option. 10

- 1) Some of the ancient civilizations in this region were
a). Mohen Jo Daro b). Shalimar c).Islamabad
- 2) The _____ Sea is in the south of Pakistan.
a). Ravi b). Arabian c).Sutlej
- 3) The _____ were not allowed participation in these games in the beginning.
a). Boys b). Women c).Children
- 4) Modern Olympic games started in the Year
a). 1982 A.D b). 1781 A.D c).1896 A.D
- 5) The five rings on the Olympic flag represents
a). 5 Continents b). 2 Continents c).6 Continents

Q No 2:- Write "YES" for correct and "NO" for wrong one. 10

1. Pakistan has a large network of Canals for irrigation. ()
2. There are many beautiful valleys in Pakistan. ()
3. The five rings on the Olympic flag shows five Continenets. ()
4. KaraKoram Peak is the highest one in the world. ()
5. Faisal Mosque is in Lahore ()

Q No 3:- Write the meanings of these words. 10

- | Words | Meanings |
|---------------|----------|
| 1. Prosperity | _____ |
| 2. Ancient | _____ |
| 3. Spears | _____ |
| 4. Restricted | _____ |
| 5. Monuments | _____ |

Q No 4: Make Sentences?

10

Words	Sentences
Repeat	
Include	
Hurts	
Forgive	
Encourages	

Q5:- Attempt any threequestion.

10

Q1. Which countries share borders with Pakistan?

Ans.

Q2. What is the Official name of Pakistan?

Ans.

Q3. How are the Olympic games inaugurated?

Ans.

Q4. When did the modern Olympic games begin?

Ans.

Q5. What do you see on the Olympic flag and what does it represent?

Ans.

Wish you best of luck.....



FROEBEL'S SCHOOL SYSTEM

FIRST MONTHLY TEST 2015

Class: 4th
Time: 01 Hours

Paper: English
Total Marks: 50

Student Name _____ Admission No _____

Note:- Attempt all questions cutting over writing is not allowed on paper.

Q No 1:- Choose the correct option. 10

- 1) The shark seems to show _____ excitements.
a). low b). full c). least
- 2) The shark loses all the _____ feelings.
a). True b). Nice c). Decent
- 3) There was a _____ in the box.
a). Hen b). Rat c). Cockerel
- 4) The servants were totally _____.
a). Confused b). Puzzle c). Down
- 5) He thought of a plan to catch a _____.
a). Man b). Thief c). Boy

Q No 2:- Choose the suitable adverbs from the brackets? 10

1. The two girls whispered (Quietly, Loudly)
2. Always speak _____ to your elders. (Politely, Loudly)
3. It was raining _____ at night. (Slowly, Heavily)
4. Ali Laughed (Bravely, Happily)
5. He writes very _____ (Badly, Quickly)

Q No 3:- Write the meanings of the words. 10

Words	Meaning
Scared	
Assembled	
Treacherous	
Astonishing	

Precious

Q No 4:- Make Sentences?

10

Words Sentences

Carefully _____

Outside _____

Down _____

Fair _____

Remember _____

Q6:- Attempt any Five questions.

10

Q1. How did the rich man find out the man who was guilty of the theft?

Ans.

Q2. Why was the rich man worried?

Ans.

Q3. What is the true character of the shark?

Ans.

Q4. What does the phrase "Astounding self control" means?

Ans.

Q5. Do you think the method of detecting thieves in the story, can be used now?

Ans.

Q6: Why were the servants' looking to one another face?

Ans.



FROEBEL'S SCHOOL SYSTEM

FIRST MONTHLY TEST 2015

Class: Three
Time: 01 Hours

Paper: G. Science
Total Marks: 50

Student Name _____ Admission No _____

Note:- Attempt all questions cutting and over writing not allowed.

Q1:- Choose the correct option. 10

- 1) Vertebrates are big in _____
a). Size b). Group c). Slow
- 2) Reptiles are cold blooded and are born on _____
a). Water b). Land c).Both
- 3) Vertebrates are _____ into five groups.
a). Classified b). Group c). Major
- 4) Born are the hard _____ of skeleton.
a). Material b). Things c). Framework
- 5) The skeleton contain a body _____
a). Shape b). Protect c). Maintain

Q2:- Mark as true or false. 10

1. A baby boy has 200 bones at birth. T / F
2. All Animals have Skeletons of one another. T / F
3. Mammals have moles on their body. T / F
4. Birds are animals that have feathers. T / F
5. Fish are vertebrates that live in water. T / F

Q3:- Match the column. 10

Column – A

Vertebrates

Skeleton

Bones

Fish

Reptiles

Column – B

Live in water

Lizards

Frame

Five Groups

Hard materials

Q4:- Write the meanings of these words.

10

Words	Meanings
Vertebrates	
Mammals	
Stream	
Skeleton	
Bone	

Q5:- Attempt any two questions.

10

Q1. What are vertebrates?

Ans. _____

Q2. How many classes of vertebrates?

Ans. _____

Q3. What are Reptiles?

Ans. _____

Q4. What are skeleton?

Ans. _____

Q5. What are bones?

Ans. _____

Wish you best of luck.....



FROEBEL'S SCHOOL SYSTEM

FIRST MONTHLY TEST 2015

Class: Two

Time: 01 Hours

Paper: G. Science

Total Marks: 50

Student Name _____ Admission No _____

Note:- Attempt all questions cutting and over writing not allowed.

Q1:- Choose the correct answers? 10

- 1) What part of a plant makes food?
a). Leaves b). Stem c). Roots
- 2) This part of a plant soaks up water and minerals. It also store food.
a). Roots b). Leaves c). Flower
- 3) What is a purpose of a plants flower?
a). Store food b). Make seed c). Make food
- 4) What gas plants release into air?
a). Carbon dioxide b). Oxygen c). Hydrogen
- 5) This part of plant is made of tiny tubes for carrying minerals and food.
a). Petals b). Roots c). Stem

Q2:- Fill in the Blanks? 10

- 1) Plants provide us _____.
- 2) Trees _____ for many years.
- 3) Some animals live on _____.
- 4) Birds have _____.
- 5) Living Things must _____.

Q3:- Match the column.

10

Column – A

Column – B

Roots

Make Food

Leaves

Make seeds

Roots

Soaks up water and minerals

Stem

Carrying Food, Minerals and water

Flower

Hold and protect seeds

Q4:- Words meaning.

10

Words

Meaning

Living Things

Breathe

Water

Important

Leaves

Q5:- Answer these question (Any two).

10

Q1. Why food is important for animals?

Ans. _____

Q2. What are carnivores?

Ans. _____

Q3. What is a tree?

Ans. _____

Q4. What is a climber?

Ans. _____

Q5. What is the function of root?

Ans. _____

Wish you best of luck.....



FROEBEL'S SCHOOL SYSTEM

FIRST MONTHLY TEST 2015

Class: Six

Time: 01 Hours

Paper: ENGLISH

Total Marks: 50

Student Name _____ Admission No _____

Note:- Attempt all questions. cutting and over writing not allowed.

Q1:- Encircle the correct answer out of given answers.

Marks 10

- 1) There was a _____ where all the feelings lived.
a). City b). Island c). Country
- 2) The _____ decided to ask for help.
a). Vanity b). Elder c). Love
- 3) _____ is capable of understanding how valuable love is.
a). Love b). Happiness c). Time
- 4) According to the _____ which monitors earthquakes worldwide.
a). USGS b). UGSS c). SSGS
- 5) The _____ waves that spread across the Indian ocean.
a). good b). bad c). killer

Q2:- Rewrite these sentences so that they make some sense?

10

1. You for here place no is there.

Ans:

2. Came winter the near and had they prepared not.

Ans:

3. Always well exams in does he.

Ans:

4. Tsunami History the in deadliest.

Ans:

6. Beautiful bought dress a the mall at

Ans:

Q3:- words meanings.

10

Words	Meanings
Realize	_____
humbly	_____
capable	_____
vanity	_____
unleash	_____
exotic	_____
novelty	_____
slammed	_____
rupture	_____

oveyoyed _____

Q No 4:- Choose the correct word from the brackets?

10

1. Teaches in School. (Teachers, Professors)
2. Drives a bus. (Pilot, Driver)
3. Books are kept. (Table, Shelf)
4. Aero plane Land. (Airport, Terminal)
5. Cars are kept. (Home, Showroom)

Q No 5: Attempt any two questions.


10

Q1. Why has the writer called Tsunami as “Perhaps the most destructive Tsunami in the History”?

Q2. Why didn't love construct the boat?

Q3. Why did the “Time” help the love?

Q4:- What do the news reports say about missing of the sea waves during Tsunami?





FROEBEL'S SCHOOL SYSTEM

FIRST MONTHLY TEST 2015

Class: Four
Time: 01 Hours

Paper: Drawing
Total Marks: 50

Student Name _____ Admission No _____

Note:- Attempt all question.

Q1:- Draw the picture of any flower and color it. 10

Q2:- Draw the picture of house and color it. 10

Q3:- Draw the picture of kite and color it. 10

Q4:- Draw the picture of grapes and color it.

10

Q5:- Draw the picture of tree and color it.

10

Wish you best of luck....



FROEBEL'S SCHOOL SYSTEM

FIRST MONTHLY TEST 2015

Class: THREE
Time: 01 Hours

Paper: ENGLISH
Total Marks: 50

Student Name _____ Admission No _____

Note:- Attempt all questions. cutting and over writing not allowed.

Q1:- Encircle the correct answer out of given answers. 10

- 1) Rainbow comes from
a). Sley b). Showers
- 2) _____ makes honey.
a). Flies b). Bees
- 3) Seeds grow into _____
a). Flowers b). Plants
- 4) The _____ turns into singing bird.
a). Eggs b). Bees
- 5) Never spend _____ lazing.
a). time b). lazing

Q2:- Rearrange the various stages from eggs to becoming frog 10

- 1) The tadpole becomes frog.
- 2) Tadpoles are foot round dots.
- 3) Soon their legs begin to appear.
- 4) Their tails gets shorter and disappear.

Q3:- words meanings.

10

Words	Meanings
Complicated	_____
Amazing	_____
Nibble	_____
Grubs	_____

Q No 4:- Make Sentences?

10

Words	Sentences
Five	
Fly	
Waste	
Drive	
Dark Night	

Q No 5: Attempt any Five questions.

10

Q1: What are the things Robot cannot do which we can do?

Q2: Can Robot and Machines think?

Q3: In what ways one Robot is similar to the people?

Q4: What dirty and dangerous jobs can Robot do for us?

Q5: Do the Robots have specific shapes?

Q6: Which is the good example of amazing inventions of the scientists?



FROEBEL'S SCHOOL SYSTEM

FIRST MONTHLY TEST 2015

Class: TWO
Time: 01 Hours

Paper: Drawing
Total Marks: 50

Student Name _____ Admission No _____

Note:- Attempt all question.

Q1:- Draw a cup and color it?

Q2:- Draw a butterfly and color it?

10

Q3:- Draw a jug and color it?

10

Q4:- Draw a glass and color it?

10

Q5:- Draw a Fish and color it?

10

Wish you best of luck....